



IT認證考試題庫 專業平臺

考證寶提供最新考古題與模擬試題
協助您高效通過認證考試

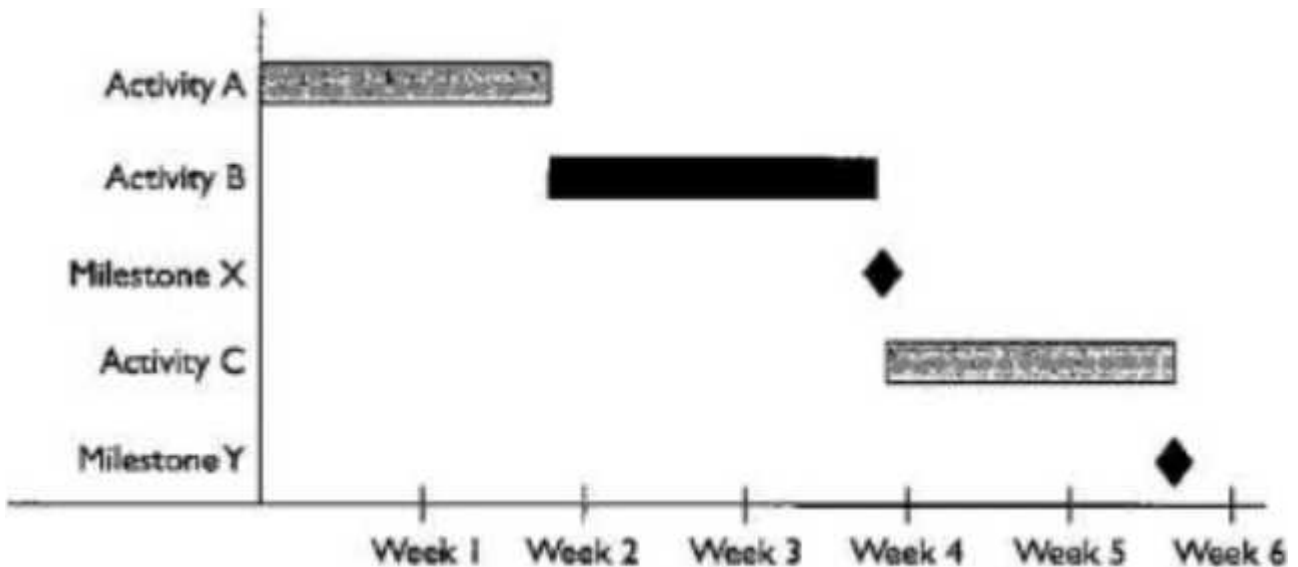
www.kaozhengpro.com

Exam : **CTS**

Title : Certified Technology
Specialist

Version : DEMO

1.Refer to the exhibit.



According to the Gantt chart pictured, the Project Manager should wait to start Activity C until which predecessor has been reached?

- A. Week 3
- B. Week 4
- C. Activity B
- D. Milestone X

Answer: D

2.As part of a service agreement offering, wfwf PRIMARY role do preventive maintenance visits (PM/PMV) play?

- A. allows the AV provider to clean, service and assess equipment in the field on a regular basis
- B. allows the AV provider to check in with customer and serves as an opportunity to sell further solutions
- C. allows the AV provider to sell a service that is often forgotten by the customer, and therefore generate greater profit
- D. allows the AV provider access to client premises and scope future work

Answer: A

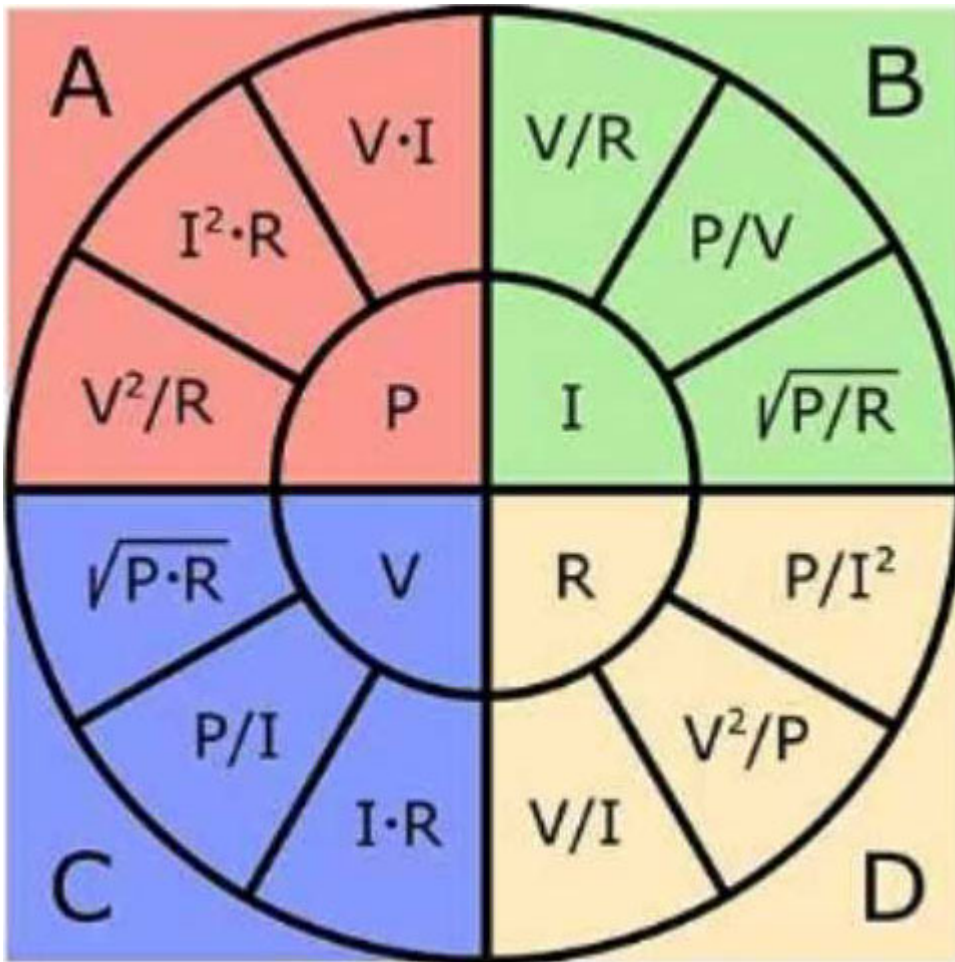
3.Which frequencies are amplified by a subwoofer?

- A. lowest
- B. mid-low
- C. mid-high
- D. highest

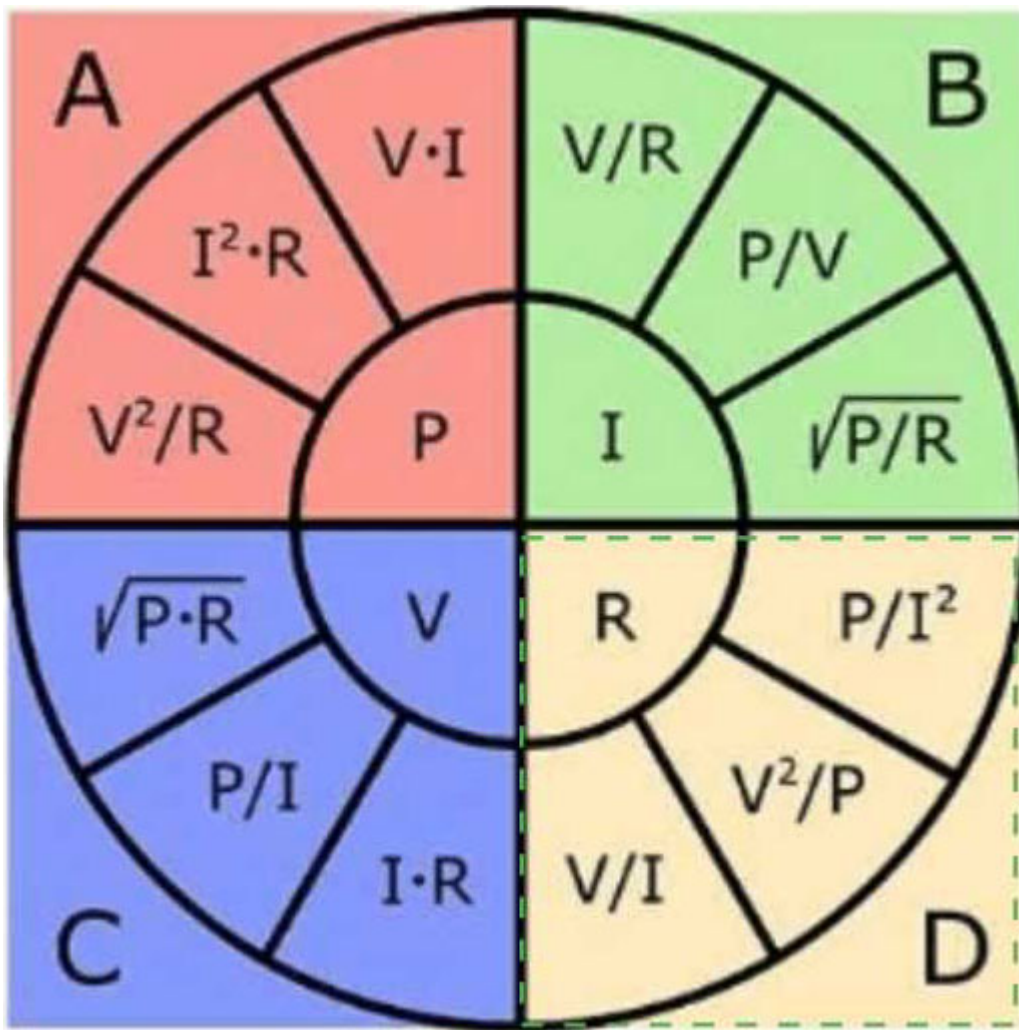
Answer: A

4.HOTSPOT

Which section of the Ohm's Law chart should be used to calculate values expressed in Ohms? Select the answer by clicking anywhere within the correct quadrant.



Answer:



5. When doing a site survey, it is MOST IMPORTANT to consider the client's

- A. budget.
- B. timeline.
- C. expectations.
- D. knowledge of technology.

Answer: C